

IMO CLASS 2 (MATHS)

Total Questions: 35

Time: 1 hr.

Section – 1 : Patterns, Odd One Out, Measuring Units, Geometrical Shapes, Spatial Understanding, Grouping, Analogy, Ranking Test, Problems based on Figures.

Section – 2 : Numerals, Number names, Number Sense (2 digit numbers), Addition, Subtraction, Lengths, Weights and Comparisons, Time, Money, Geometrical Shapes and Solids, Patterns.

Section – 3 : Syllabus as per Section–2.

Section – 4 : Higher Order Thinking Questions - Syllabus as per Section–2.

SECTION 01 LOGICAL REASONING

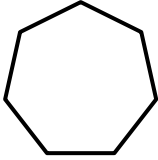
- Mia had \$100 with her. Her father gave her \$50 as pocket money. Her grandmother gave her \$100 as a birthday gift. How much money does she have altogether?
a. \$150
b. \$200
c. \$100
d. \$250
- Roger started his homework at the time mentioned on the clock. He finished his homework in 3 hours and 15 minutes. At what time did he finish his homework?



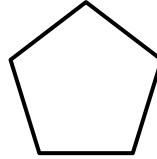
- If Mango = 400 grams, Apple = 200 grams and Mango + Apple + Grapes = 800 grams, then what will be the weight of Grapes?
a. 100 grams
b. 200 grams
c. 300 grams
d. 400 grams

4. Which of the following shapes has maximum number of sides?

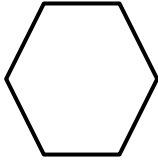
a.



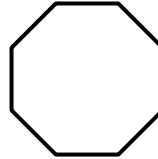
b.








c.



d.



5. Based on the image given below answer the following question: Who has the maximum number of crayons?

Tia	
Milo	
Bruce	
Tom	
Each  Stands for 5 crayons	

a. Tia

b. Milo

c. Bruce

d. Tom

6. Oscar has to board a train that arrives at the station at 4:20 p.m. If he reaches the station at 3:45 pm, then how long will he have to wait at the platform?

a. 45 minutes

b. 40 minutes

c. 50 minutes

d. 35 minutes

7. I am a two-digit number between 20 and 30. My ten's place digit is greater than one's place digit. Who am I?

a. 28

b. 27

c. 21

d. 23

8. George is curious about which of the choices below is the odd one out assist him

a. Height of building = 12 m

b. Height of chair = 2 m

c. Weight of stone = 2 kg

d. Length of rod = 25 cm

GG RS LEARNING HUB PVT. LTD.

One represents 10 Toys	
Name	Number of Toys
Amy	
Lucy	
Tia	
Dolly	
Sia	

- a. 20 b. 40
 c. 60 d. 80

24. Mike had four quarters and four dimes. How much money did Mike have left after he gave Marshal 50 cents?

- a. 50 cents b. 70 cents
 c. 80 cents d. 90 cents

25. How many months will be there for 3 years?

- a. 12 b. 24
 c. 36 d. 48

26. Which of these statements is correct regarding the picture given?



- a. Cake is heavier than fruits b. Fruits are heavier than cake
 c. Cake and fruits are equal in weight d. Fruits are lighter than cake

27. Alice went to the supermarket with 800 cents. She did some shopping for 530 cents and spent 60 cents on the metro for commuting in one direction. If she took the metro for both to and travel, then how much money is left with her?

- a. 120 cents b. 150 cents
 c. 130 cents d. 170 cents

28. Max went from his home to his school by cycle and then walked from school to the library. He walked back from the library to school to take his cycle and came back home. How much distance did he cycle?



- a. 1 km 470 m b. 1 km 570 m
 c. 1 km 200 m d. 1 km 238 m

29. Find the missing number:

$$128 + 314 - ? = 653 - 482$$

- a. 271 b. 583
 c. 571 d. 143

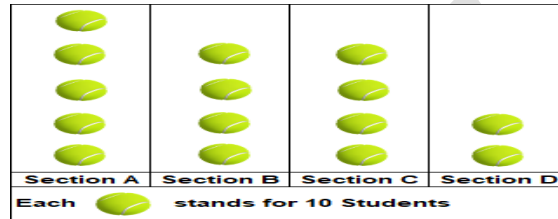
30. Oliver went shopping on the second Sunday of the month. After checking for the products, she found 2 of them faulty and returned them on the immediate Tuesday as the shop remains closed every second Monday of the month. On which date did she return the products?

January 2019						
Su	Mo	Tu	We	Th	Fr	Sa
		1	2	3	4	5
6	7	8	9	10	11	12
13	14	15	16	17	18	19
20	21	22	23	24	25	26
27	28	29	30	31		

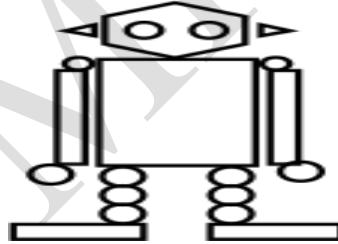
- a. January 14 b. January 15 c. January 22 d. January 28

SECTION04 ACHIEVER SECTION

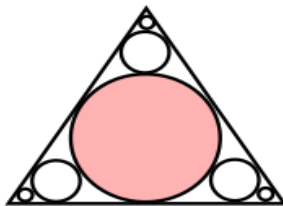
- 31.** What is the number name for 134 more than 625?
 a. Seven hundred and ninety b. Seven hundred and ninety-five
 c. Seventy-nine d. Seven hundred and fifty-nine
- 32.** The given picture shows the number of students in sections A, B, C and D of class 2. How many students should be transferred from section C to D so that there are equal number of students in both sections?



- a. 1 b. 2
 c. 10 d. 20
- 33.** How many circles are there in the picture?



- a. 8 b. 10 c. 6 d. 12
- 34.** How many circles are there in the picture?



- a. 5 b. 6 c. 7 d. 8

- 35.** The organisation is holding a painting activity in which six groups of students have participated. Each group is made up of four students. How many students took part in the painting activity?
 a. 20 b. 22 c. 24 d. 28